

Matemática

EJA - Educação de Jovens e Adultos

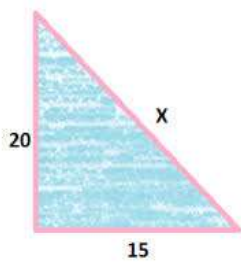
8ª SÉRIE - Anos Finais

Nome: \_\_\_\_\_

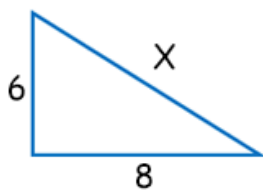
**Orientação:** Para realização das atividades leia o texto e anote as questões/enunciados no caderno.

1) Usando o teorema de Pitágoras, descubra o valor de x:

a)

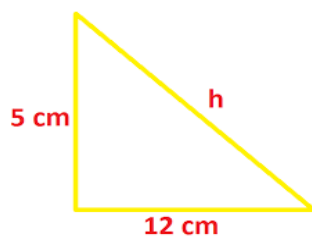


b)

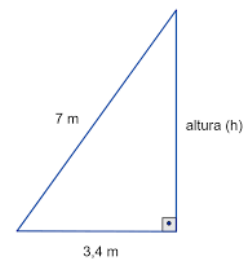


2) Qual é a altura (h)?

a)



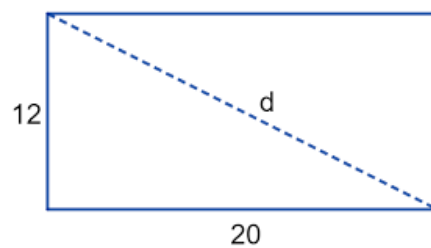
b)



3) Qual o valor da medida

d?

a)



b)

